

## Year 1 Home Learning

Set: Friday 28th September 2018

Complete by: **Wednesday 3<sup>rd</sup> October 2018**


Name \_\_\_\_\_

# Making 10


$4 + \square = 10$




$2 + \square = 10$




$3 + \square = 10$



$8 + \square = 10$



$5 + \square = 10$



This was:



