



Revision Booklet

Please talk about these sums and
discuss how to work them out.

Encourage your child to use any space
to help work their answers by writing
numberlines, sums or pictures if
needed.



Addition

Write the answer:

$4 + 6 =$

$14 + 6 =$

$24 + 6 =$

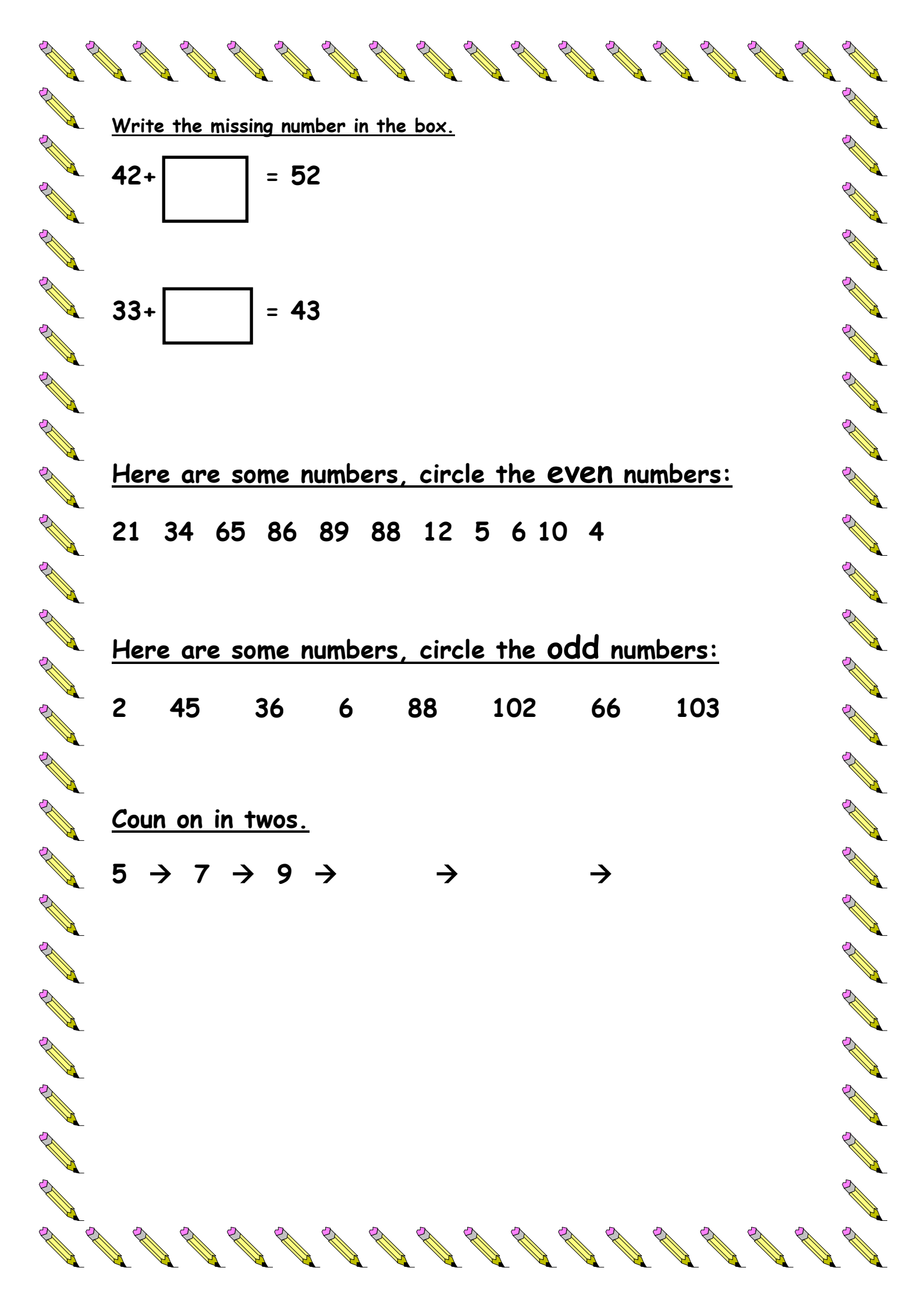
$7 + 6 =$

Sammy has 6 bannans

8 apples and

2 lemons

Write a number sentence to work out how many fruit he has altogether



Write the missing number in the box.

$$42 + \boxed{} = 52$$

$$33 + \boxed{} = 43$$

Here are some numbers, circle the even numbers:

21 34 65 86 89 88 12 5 6 10 4

Here are some numbers, circle the odd numbers:


2 45 36 6 88 102 66 103

Count on in twos.

5 → 7 → 9 → → →



Look at the circles



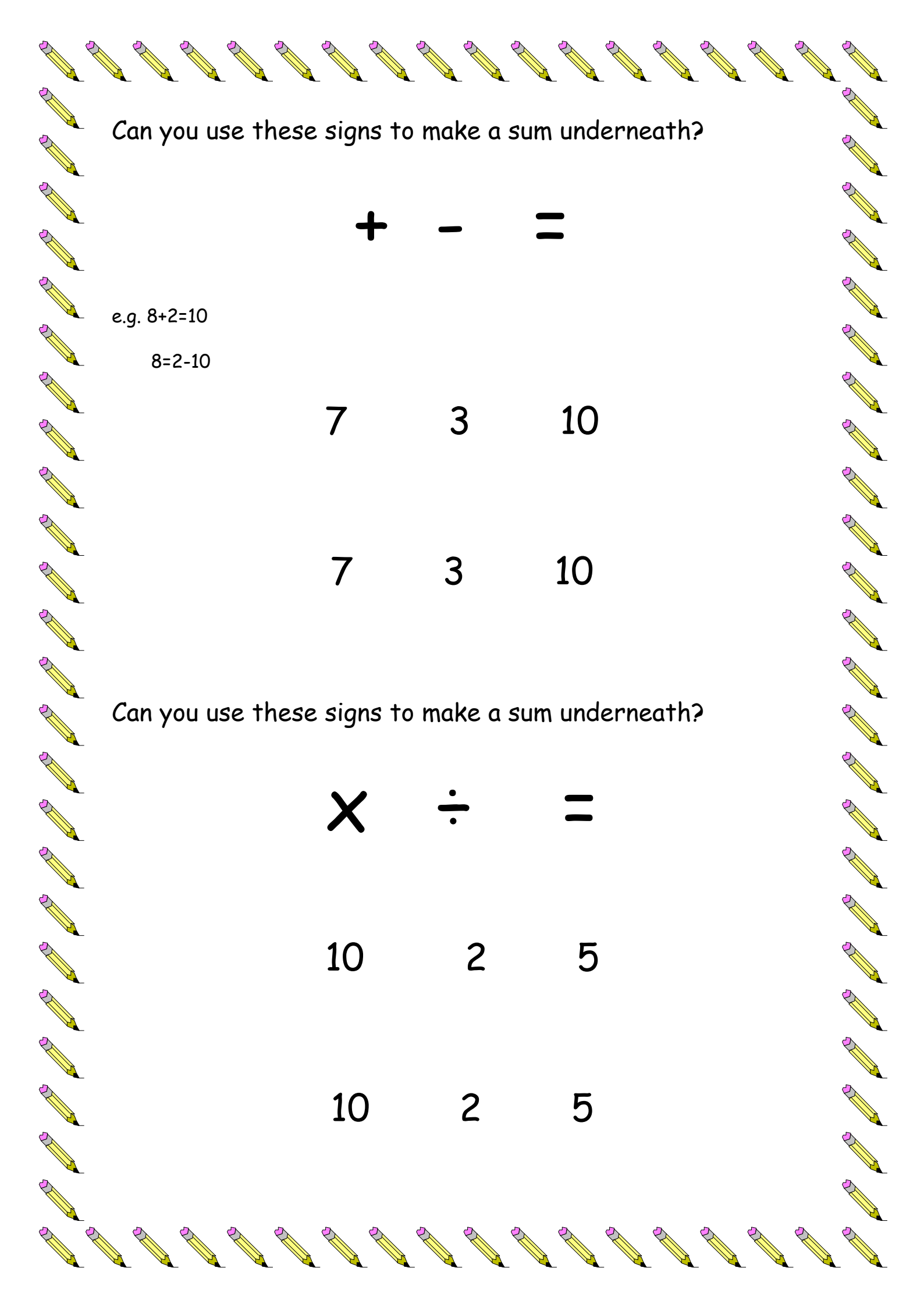
How many balls are there?

How many groups of 5 can you make?

Two of the lines are the same length.

Use a ruler to find them. Tick the lines that are the same length.





Can you use these signs to make a sum underneath?

+ **-** **=**

e.g. $8+2=10$

$8=2-10$

7 3 10

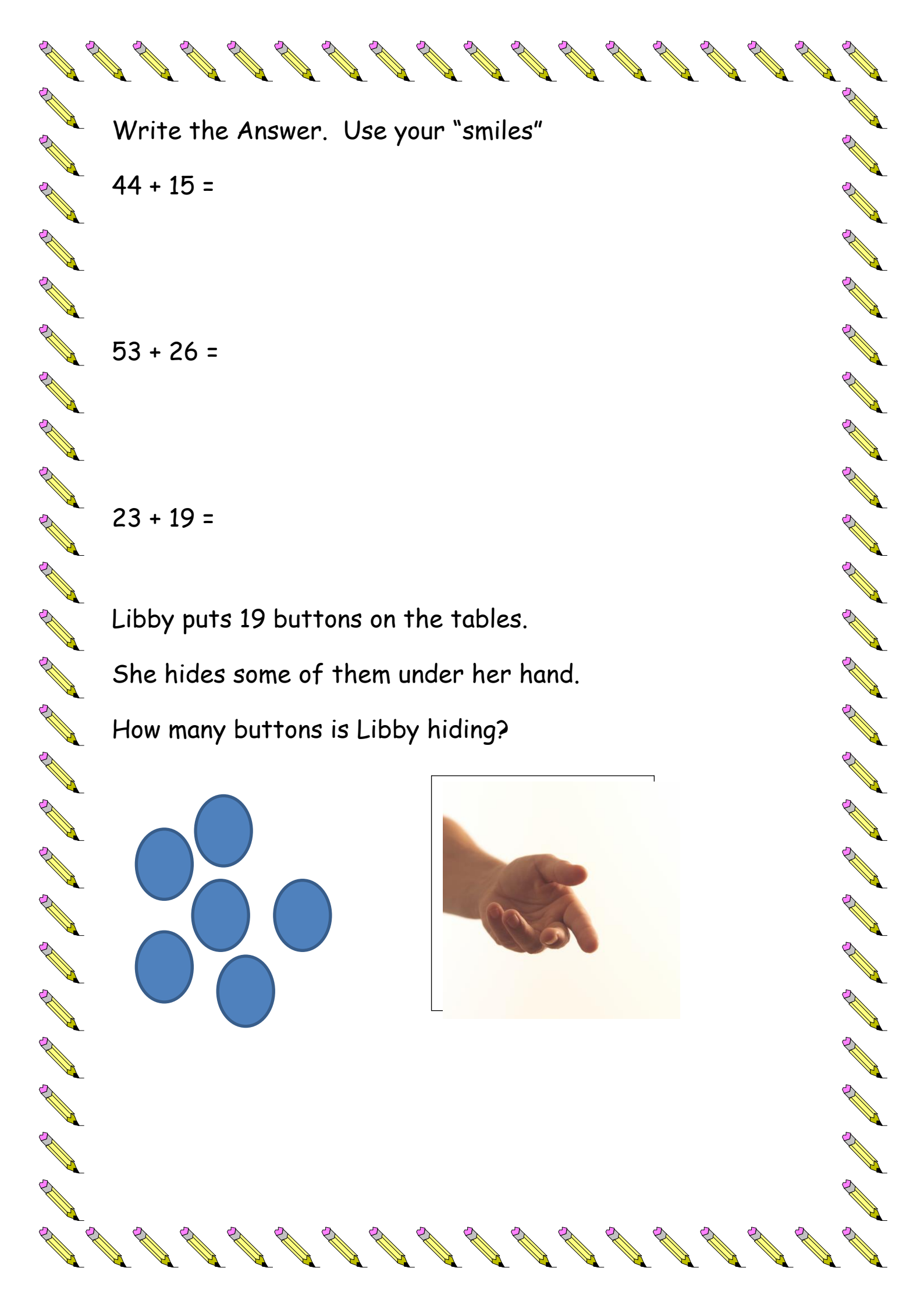
7 3 10

Can you use these signs to make a sum underneath?

× **÷** **=**

10 2 5

10 2 5



Write the Answer. Use your "smiles"

$$44 + 15 =$$


$$53 + 26 =$$


$$23 + 19 =$$

Libby puts 19 buttons on the tables.

She hides some of them under her hand.

How many buttons is Libby hiding?





14 children are on an aeroplane.

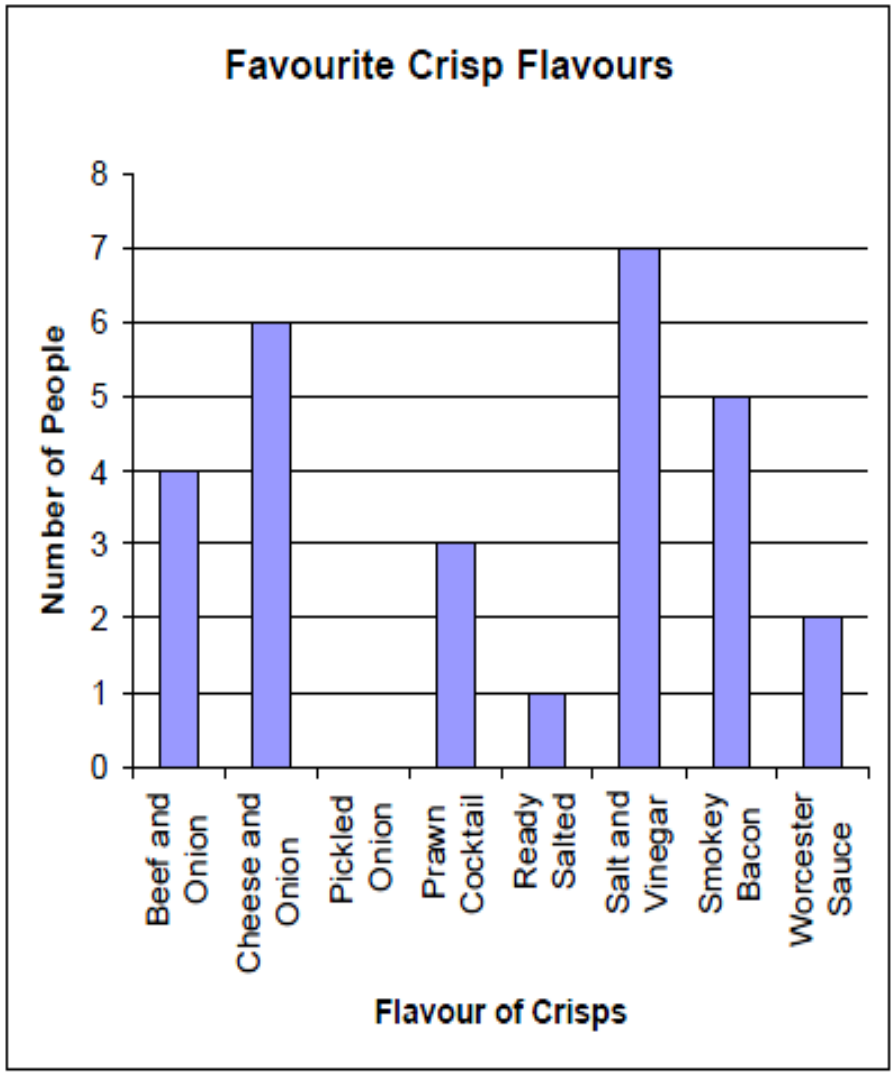
6 get off.

Then 5 more children get off.

How many children left on the aeroplane?

$$37 + 56 = 56 +$$

$$22 + 39 = 39 +$$



How many people ate cheese and onion?

What crisps did 4 people eat?

Which two flavours add upto 12?

Which the least popular flavour?



There are 5 balloons in a packet.
Paul needs 40 balloons.
How many packets does Paul need?

Tom's Money:



He spends half. How much does he have left?



Write the correct numbers in the boxes.

Half of 16 is

Double 14 is

Look at the table.

Object	length
crab	20cm
bucket	17cm
spade	10cm
ball	15cm
net	6cm

Which object is half the length of the crab?

The ball is longer than the net. How much longer?



55p

Megan wants a teddy. She has **30p**.

How much **more** does she need?